


ST. ANDREWS SCOTS SCHOOL

Navniti Apartment I.P. Extension, Patparganj, Delhi – 110092

2025-26

Class V



ENGLISH

Reading Corner

1. Read a book of your choice (storybook or novel) and summarize it in your own words (100-150 words). You can include the theme of the story, characters, and any incident in the story. Also draw or paste a picture of your favourite character.
2. Read L-2 Memories of a Visit. Based on your reading, create a collage of major cities, rivers, cuisine, costumes and landmarks of France.

Writing Fun

1. Imagine you are a travel blogger. Write a descriptive paragraph about a place you'd love to visit.

Grammar Practice

1. Complete the given grammar worksheet.

Creative Expression

1. Create your own mini story book. Theme should be "A Magical Adventure".

Memorization

1. Learn the Q/A and Word- Meanings of L-1 (The Man Who Fought Windmills).
2. Learn a humorous poem. It should not be less than 12 lines.

Submission

Please submit your work in a small notebook or handmade folder, ensuring proper handwriting and formatting.

Have a wonderful break!



ST. ANDREWS SCOTS SCHOOL

Navniti Apartment I.P. Extension, Patparganj, Delhi-110092

Session 2025-26

Class : V

Worksheet

Subject : English Grammar

I. Identify the types of sentences. Tick the correct answer.

1) They are feeling tired.

a) declarative b) imperative c) interrogative d) exclamatory

2) Don't shout at me.

a) declarative b) imperative c) interrogative d) exclamatory

3) Have you done your work?

a) declarative b) imperative c) interrogative d) exclamatory

4) Wow! What a nice place it is.

a) declarative b) imperative c) interrogative d) exclamatory

II. Underline the nouns in the following sentences and put them in the correct boxes:

1. A herd of elephants blocked the road.

2. Our team won the championship which was held in Delhi.

3. Heidi's friend admired her beauty.

4. Kim has a lot of maturity.

5. Manish lives in a small village.

6. Our grandparents are full of wisdom.

7. Mrs. Seema, my English teacher praised me for my honesty.

<u>Common</u>	<u>Proper</u>	<u>Collective</u>	<u>Abstract</u>

III. Rearrange to make sentences as instructed.

1. plenty/ is/ There/ everyone/ food/ of/ for (assertive)

2. beautiful/ it/ is/ What/ day/a (exclamatory)

3. play/ Do/ basket ball/ you (interrogative)



4. not/ Do/ objects/ play/ sharp/ with (imperative)

SCIENCE

Q1. Take a sweet potato and a small jar of water. Keep the sweet potato in jar of water for 2 days. After 2 days, record your observation. Paste the pictures in scrapbook and write about your observation.

Q2. Visit a zoo and make a report on different animals you saw there. Paste their pictures and write their feeding habits, breathing organs, mode of movement etc. in your scrapbook.

Q3. Ask a doctor to give you the X-ray of different body parts. Try to observe and write in your scrapbook about the different parts of skeleton and joints you have observed.

Q4. Our skin is very important to us. We should take proper care of the skin. Write different ways to take care of the skin in your scrapbook. Also paste relevant pictures.

Q5. Read lesson 1, 2 and 3. Learn all the work done in your notebook and practice all the diagrams. Paste the print out of worksheet in your notebook and do it.

(Make a separate science scrapbook and do all the above given work in it.)



ST. ANDREWS SCOTS SCHOOL

Navniti Apartment I.P. Extension, Patparganj, Delhi-110092

Session 2025-26

Class : V
Science

Worksheet

Subject :

Q1) Fill in the blanks

- _____ and _____ add nutrients to soil.
- The snake moves with the help of its _____.
- We have _____ kinds of muscles in our body.

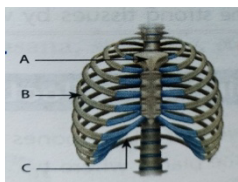
Q2). True or False

- Reflex actions are controlled by spinal cord. _____
- Muscles are attached to the bones by cartilage. _____
- Rats and rabbits live in burrows. _____

Q3) Name them.

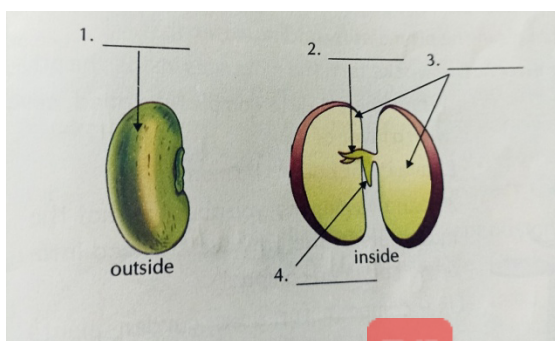
- The largest part of the brain. _____
- The screen on which image is formed in the eye. _____
- Two kharif crops. _____

Q4). Look at the picture and answer the following questions.



- How many pairs of ribs form the cage? _____
- Name the organs that are protected by the ribcage. _____
- Name the part 'C'. _____
- What is the role of part 'A'? _____

Q5). Label the following pictures.



HINDI

यह सभी कार्य पंक्ति वाली A4 साइज शीट पर करके सुंदर फोल्डर में लगाइए।

१-आप जिस प्रदेश के रहने वाले हैं उसके खान-पान , वेशभूषा तथा दर्शनीय स्थल आदि पर एक लेख तैयार कीजिए तथा उससे संबंधित चित्र भी लगाइए ।

२-करो योग , रहो निरोग इस विषय पर 10 से 12 पंक्तियां लिखिए तथा योग करते हुए अपनी एक - दो फोटो भी लगाइए।

३-अपने घर या घर के आसपास उगने वाले किन्हीं पांच ऐसे पौधों या वृक्षों के नाम लिखिए जिनका प्रयोग हम औषधि के रूप में भी करते हैं तथा यह भी बताइए कि उनका उपयोग हम किन रोगों को दूर करने के लिए करते हैं?

४-प्रत्येक संयुक्त व्यंजन का प्रयोग करते हुए पाँच- पाँच शब्द लिखिए तथा उनके चित्र भी बनाइए ।

५-अब तक कराए गए पाठों का अभ्यास कीजिए व प्रतिदिन अपनी पाठ्यपुस्तक का एक पृष्ठ पढ़िए।



सेंट एंड्रयूज़ स्कॉट्स स्कूल

आई.पी.एक्स पटपड़गंज दिल्ली-११००९२

सत्र: २०२५-२०२६

कार्य पत्रिका -भाषा और व्याकरण , संज्ञा

कार्य पत्रिका का प्रिंट आउट निकाल कर इसे पूरा करके अपने हिंदी उत्तर पुस्तिका में लगाइए।

क) सही विकल्प के आगे (✓) का चिह्न लगाइए।

प्र०१) भाषा के कितने रूप होते हैं?

क) तीन

ख) दो

ग) चार

प्र०२) संपूर्ण विश्व की संपर्क भाषा कौन सी है?

क) हिंदी

ख) अंग्रेजी

ग) फ्रेंच

प्र०३) भाषा का सीमित और क्षेत्रीय रूप क्या कहलाता है?

क) मौखिक

ख) लिखित

ग) बोली

प्र०४) केरल में कौन सी भाषा बोली जाती है?

क) तेलुगू

ख) बंगाली

ग) मलयालम

ख) सही वाक्य के सामने (✓) और गलत वाक्य के सामने (×) का चिह्न लगाइए।

क) विश्व में भाषाएँ अनेक हैं, पर लिपि एक है। ()

ख) किसी भाषा को लिखने की विधि लिपि कहलाती है। ()

ग) बांग्ला एक विदेशी भाषा है। ()

घ) संस्कृत भाषा की लिपि देवनागरी है। ()

ग) निम्न वाक्यों में से संज्ञा शब्द रेखांकित कर भेद बताइए।

क) नदी का पानी शीतल है।

ख) महिलाएँ भजन गा रही हैं।

ग) हवा महल जयपुर में स्थित है।

घ) जलेबी में मिठास होती है।



SOCIAL SCIENCE

Do the holiday homework in a scrap book.

Academics

1. World Environment Day- Make a poster and write catchy slogan.
2. Draw the following symbols:-
 - i. Dam
 - ii. Temple
 - iii. Mine
 - iv. Metalled Road
 - v. International Boundary

Writing

Look up the Internet and find out the names of few places through which equator passes.

Map Work

Mark all the continents and oceans on world physical map.

Activity

1. Visit any one historical place in Delhi, click pictures, paste in scrape book and write few lines about it.
2. Cut and paste the weather report from the newspaper from 1st June'23 to 10th June'23.

Learning

Learn all the work done in the class.

Take the printout of worksheet and paste it in notebook.



ST. ANDREWS SCOTS SCHOOL

Navniti Apartment I.P. Extension, Patparganj, Delhi-110092

Session 2025-26

Class : V

Worksheet – (L-3 & 6)

Subject : Social Science

Q1.State “T” for the true and “F” for false statement:

- i) The Evergreen forests remain green throughout the year.-
- ii) The Earth revolves around the Moon.-

Q2.Define the following terms:

- i) Orbit-

- ii) Canopy-

Q3.Answer in one word:

- i) The original inhabitants of DRC -
- ii) Movement of Earth around the Sun-

Q4.Fill in the blanks:

- i) The capital of the DRC is
- ii) The Southern Hemisphere experiences winter in the month of

Q5.Draw the following diagrams:

- i) Rotation of the Earth
- ii) Formation of day and night



MATHEMATICS

- Complete the work of unit-1, 2 & 3 in notebook.
- Do practice of unit-1 & 2 in practice notebook.
- Learn tables properly from 2 to 20

Real life connect

Read the newspaper for at least 10 days and cut out 10 articles in which large numbers appear. Stick them on a chart paper and write their number names.

Research Based

- a) Find the sum of the current population of the following metro cities like Delhi , Mumbai and Chennai.
- b) Which is the most populous city among these?

Do the given question in ruled sheet.



ST. ANDREWS SCOTS SCHOOL

Navniti Apartment I.P. Extension, Patparganj, Delhi-110092

Session 2025-26

Class : V

Worksheet

Subject : Maths

Q1 Choose the correct option:-

a) The difference between the smallest 7 digit number and the greatest 6 digit number is

- i) 100 ii) 1 iii) 10 iv) 0

b) $XC - XXI$ is the same as

- i) $L + XIX$ ii) $XL + IV$ iii) $C + XL$ iv) $L + IX$

c) Which one of these numbers rounds to 1000?

- i) 949 ii) 910 iii) 899 iv) 1045

Q2. Find the difference of the place value of two 7's in 32,17,170.

Q3. Round off each of the following numbers to the nearest tens, hundreds and thousands.

- a) 23553 b) 1861

Q4. Fill the blanks:-

a) $C + \underline{\hspace{2cm}} = CXLIX$

b) $CD + \underline{\hspace{2cm}} = D$

Q5. The population of a country is 8,32,48,000 . If the number of females is



3,88,43,175 . Find the number of males in the country.

ART AND CRAFT

- Complete page no 3 to 20 in Fusion and Fission Art and Craft Book.
- Make Borders for soft board (4 Pieces -length-85 inches, Breadth -5 Inch each). Note: Use Pastel sheet of same colour and same design.

COMPUTER

Instructions:

- Answer all questions on coloured sheets.
- You may use MS Excel 2016 if available.
- Decorate your work neatly and creatively.
- Complete the L-1 & 2 in Book & Notebook.
- Learn L-1 & 2

Part A: Answer the Following Questions

1. What is Microsoft Excel used for?
2. What is a spreadsheet?
3. Name two devices used to store data?
4. What is the use of the formula bar?

Part B: Fill in the Blanks

1. _____ **memory** stores data temporarily while the computer is on.
2. The _____ is used to type data or formulas.
3. CD and DVD are examples of _____ storage.



4. Columns are labeled using _____, and rows are numbered using _____.

Part C: Draw and Label

Draw a spreadsheet with **5 columns and 5 rows**.
Label the following:

- Column B
- Row 4
- Cell C3
- Formula Bar
- Sheet Tab

(Add colors to make it fun!)

Part D :Crossword Fun

Fill in the crossword using these clues:

1. The horizontal part of a spreadsheet – **Row**
2. The place where a row and column meet – **Cell**
3. Used to add or calculate numbers – **Formula**
4. You type data into this – **Cell**

(Draw a simple 4x4 crossword grid and fill in the words as hints.)

Part E : Design a Poster on:

How We Store Data in Computers

Include:

- Pictures or drawings of pen drives, CDs, hard disks, etc.
- Short labels or facts (e.g., "A CD stores up to 700MB of data")



- Make it colourful and creative!

FRENCH

Project Activities

Q1) Write the names of 10 names of Animals, 10 Fruits, and 10 Vegetables in French. Accompany each word with a small picture or drawing. Use A-4 sized sheets for this activity.

Q2) Draw the Eiffel Tower on an A3 sheet and decorate it creatively using waste materials. Let your imagination run wild and add a personal touch to this iconic landmark!

Have fun and get Creative!

Q3) Cover our French notebook with a blue coloured chart paper, handmade sheet or pastel sheet. Decorate the cover with pictures related to French Culture.

ST. ANDREWS SCOTS SCHOOL

Navniti Apartment I.P. Extension, Patparganj, Delhi-110092

Session 2025-26

Class : V

Worksheet

Subject : French

Q1) Revise Ch-1 et Ch-2

Q2) Répondez aux questions (Answer these questions)

- 1) Comment s' appelle la France?
- 2) La France est en
- 3) Quelle est la capitale de la France?



- 4) Nommez trois moyens de transports
- 5) De quelle couleur est le drapeau français
- 6) Nommez deux monuments de France
- 7) Nommez un vin, un parfum, un pain, un fromage français

Q3) Retrouvez les mots (Find these words)

- 1) doem -
- 2) reuvol -
- 3) gefroma -
- 4) chneal -
- 5) betteagu -
- 6) exahgnoe -

Q4) Nommez un nom pour chaque lettre (Name a noun for each letter)

- 1) A comme
- 2) G comme
- 3) K comme
- 4) U comme
- 5) R comme
- 6) S comme

Note: All the questions to be completed in French Notebook.

LIBRARY

Here's a breakdown of the assignment.

Assignment Details

1. **Story book** : Read any storybook of your choice.
2. **Task 1** : Write a short summary (15-20 lines).
3. **Task 2** : Include the moral of the story.
4. **Task 3** : Describe your favourite Character.
5. **Requirements**:
 1. Work should be neat.



2. Use A4 – sized paper.

This assignment encourages Class 5 students to develop their reading, writing, and

critical thinking skills. It also allows them to express their creativity and opinions

About the story.

